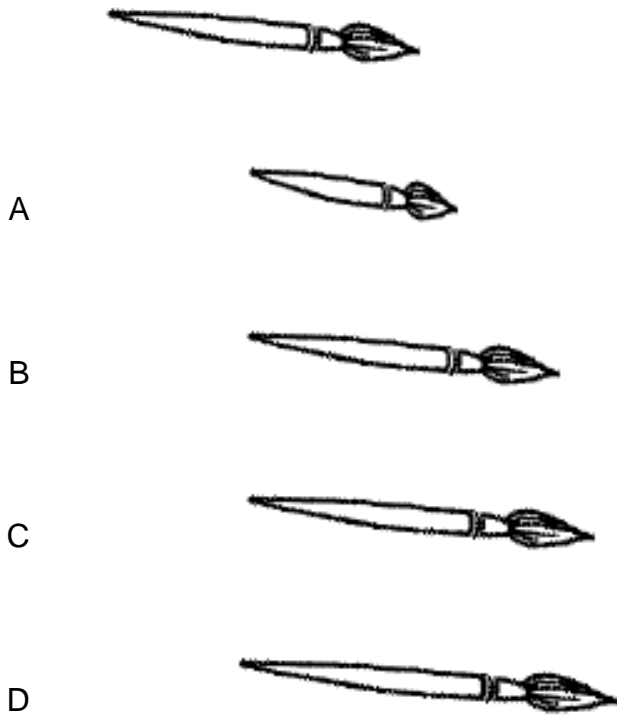
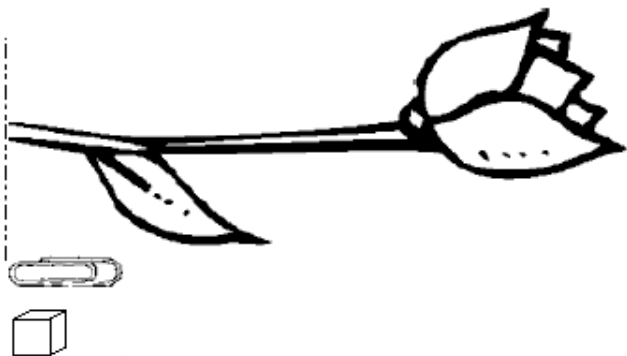


1 Which paintbrush has the same length as this paintbrush?

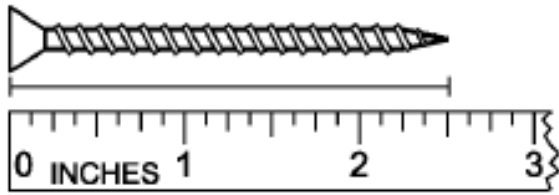


2 Does it take more cubes or more paper clips to measure the length of the flower?



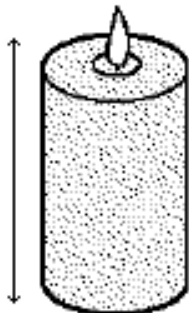
- A It takes more paper clips.
- B It takes the same amount of cubes and paper clips.
- C It takes fewer cubes.
- D It takes more cubes.

3 How long is the screw?



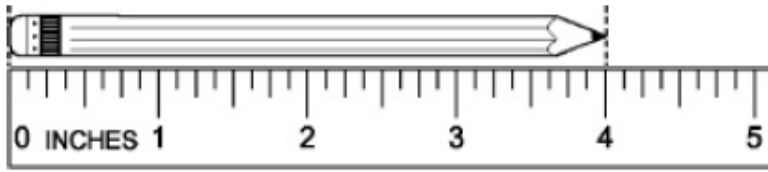
- A 2 and a half inches
- B 2 inches
- C 1 inch
- D one-half inch

4 What would be the best unit to measure the height of a candle?



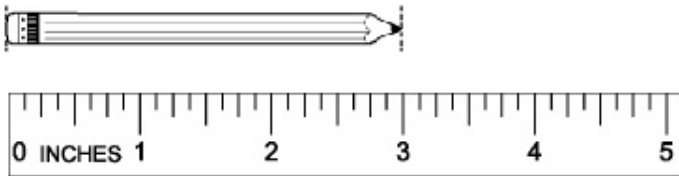
- A kilograms
- B grams
- C centimeters
- D meters

5 How many inches long is the pencil?



- A 2
- B 3
- C 4
- D 5

6 How long is the pencil?



- A 1 inch
- B 2 inches
- C 3 inches
- D 4 inches

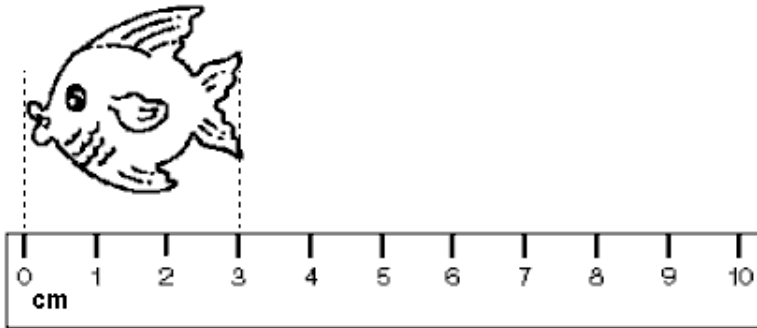
7 Which unit is best for measuring a worm?

- A meters
- B yards
- C miles
- D centimeters

8 1 yard equals \_\_\_\_ inches.

- A 12
- B 20
- C 32
- D 36

9 What is the length of this fish?



- A 1 centimeter
- B 2 centimeters
- C 3 centimeters
- D 4 centimeters

10 A sheet of paper is best measured in which unit?

- A inches
- B feet
- C yards
- D pounds

- 11 Use the addition fact to help you subtract. What number completes the problems?

$$\begin{array}{r} ? \quad 16 \\ + 9 - 9 \\ \hline 16 \quad ? \end{array}$$

- A 4
- B 5
- C 9
- D 7

- 12 Use the addition fact to help you subtract. What number completes the problems?

$$\begin{array}{r} ? \quad 14 \\ + 9 - 9 \\ \hline 14 \quad ? \end{array}$$

- A 4
- B 5
- C 9
- D 7


- 13  $8 - 2 = ?$

- A 3
- B 4
- C 5
- D 6

14  $7 - 5 = ?$

- A 3
- B 4
- C 5
- D 2

15 Adelle has 50 stickers. Edward has 7 stickers. How many stickers do they have altogether?



Adelle's stickers



Edward's stickers

- A 50
- B 55
- C 57
- D 67

16 What symbol is missing?

$70 - 20 \underline{\quad} 50$

- A -
- B =
- C <
- D +

17 Which sign is missing?

$$47 \_ 31 = 16$$

- A -
- B +
- C =
- D \*

18  $56 + 26 = ?$

- A 30
- B 72
- C 80
- D 82

19 Amit has 50 stickers. Sylvie has 9 stickers. How many stickers do they have together?

- A 49 stickers
- B 50 stickers
- C 58 stickers
- D 59 stickers

20 Which means the same as “11 take away 2 is 9”?

- A  $11 - 2 = 9$
- B  $11 + 2 = 9$
- C  $9 - 2 = 11$
- D  $11 + 9 = 2$

21 Which means the same as 33 plus 17 equals 50?

- A  $17 - 50 = 33$
- B  $33 + 17 = 50$
- C  $50 - 33 = 17$
- D  $17 + 50 = 33$

22 Carson made a chart to show how many dogs he saw each week.

Week	Number of dogs
1	6
2	12
3	11
4	8

Which week did Carson see the most dogs?

- A Week 1
- B Week 2
- C Week 3
- D Week 4



23 This chart shows the flowers some students brought to decorate their classroom. Who brought the fewest flowers?

Name	Number of flowers
Harry	9
Dena	7
James	11
Gabby	6
Hana	9

- A Hana
- B Gabby
- C James
- D Dena

24 How many flowers are there?



- A 6 flowers
- B 12 flowers
- C 15 flowers
- D 22 flowers

25 How many teddy bears are in 4 groups of 3?

- A 3
- B 6
- C 9
- D 12

26

$$35 + 5 + 15 = ?$$

- A 35
- B 45
- C 55
- D 65

27  $28 + 39 + 40 = ?$

- A 97
- B 107
- C 108
- D 170

28 What time does the clock show?



- A noon
- B 1 o'clock
- C 11 o'clock
- D 2 o'clock

29 How many minutes long is Social Studies?

**AFTERNOON SCHEDULE**

12:00 – 1:00	Social Studies
1:00 – 1:45	Science
1:45 – 2:00	Recess
2:00 – 2:45	Physical Education

- A 60 minutes
- B 45 minutes
- C 2 hours
- D 4 hours