
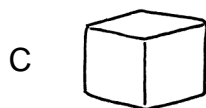
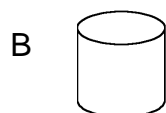


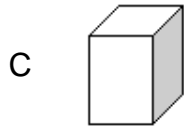
1 Which of the balls is smallest?



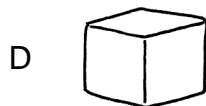
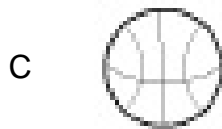
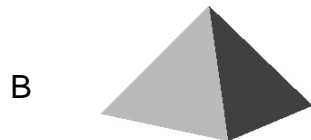
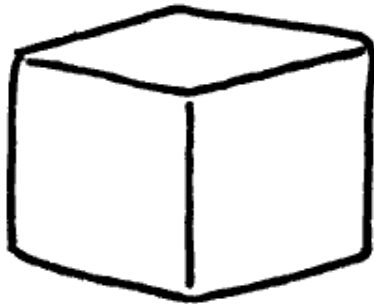
2 Which shape has no flat sides?



3 Which shape has flat sides?



4 Which is shaped like this



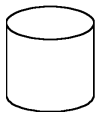
5 Which shape has sides shaped like this?



A



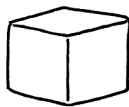
B



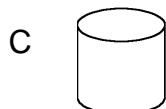
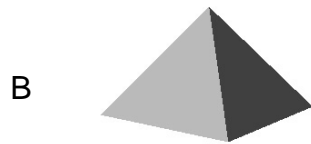
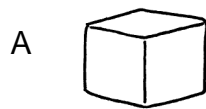
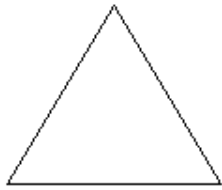
C



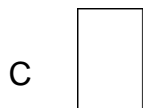
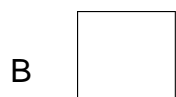
D



6 Which has sides shaped like this?



7 Which shows what the bottom of this shape looks like?



8 Which coin is first in the row?



9 $7 - 4 = ?$

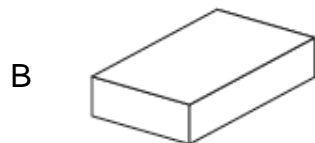
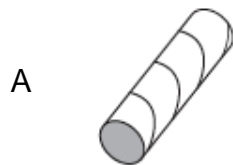
A 3

B 6

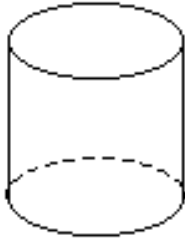
C 9

D 12

10 Which object can roll and stack?



11 Which object has the same shape as a cylinder?



A



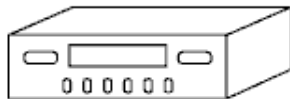
B



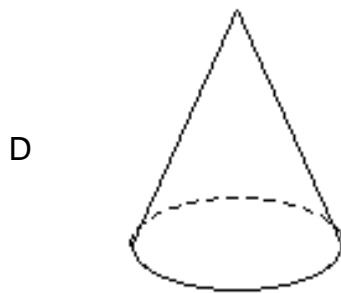
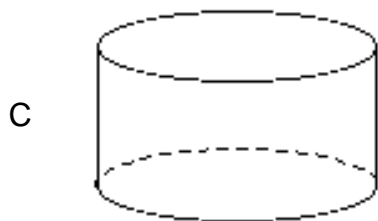
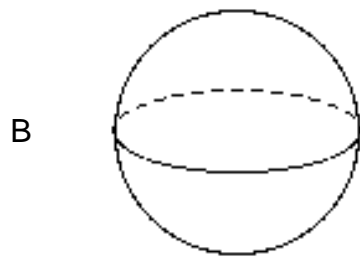
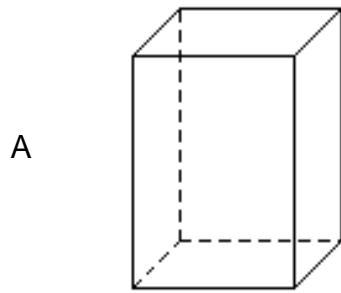
C



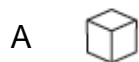
D



12 Which solid figure has only 1 flat surface?



13 Which solid figure looks like an ice cream cone?



14 $12 - 3 = ?$

- A 3
- B 6
- C 9
- D 12

15 Which animal comes after the snail in the row?

