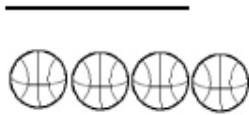
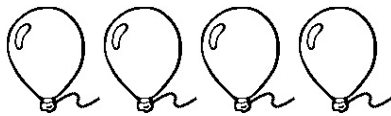






1 How long is the line?




- A one basketball
- B two basketballs
- C three basketballs
- D four basketballs





2 Which is between 3 and 4 balloons long?




- A 
- B 
- C 
- D 

3 How many pennies make a row the same length as 4 buttons?



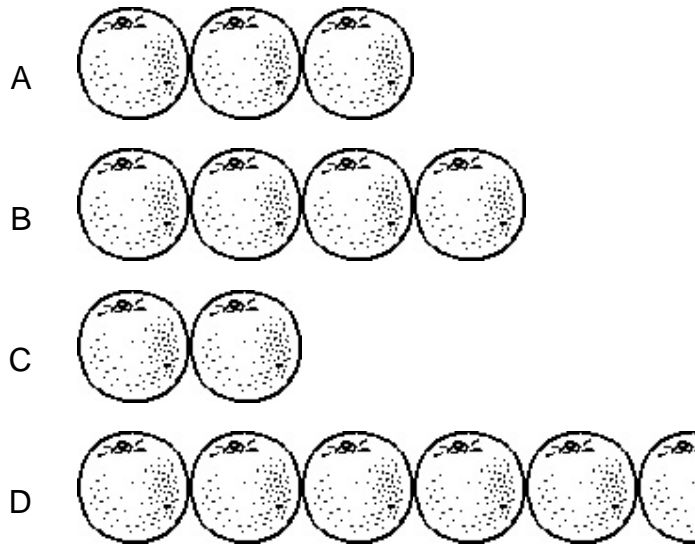
- A 
- B 
- C 
- D 

4 Which is the largest part of the truck?




- A its length
- B its width
- C its height
- D its depth

5 Which line is at least 5 oranges long?



6 How many cats are equal to 4 dogs in length?







- A 2 cats
- B 3 cats
- C 4 cats
- D 5 cats

7 How many quarters wide is this triangle?




- A 
- B 
- C 
- D 

8 Which row is between four and five apples long?

- A 
- B 
- C 
- D 


9 Which is the longest part of the fish tank?




- A its length
- B its width
- C its height
- D its depth

10 How many bees make a line as long as seven dimes?



- A 
- B 
- C 
- D 

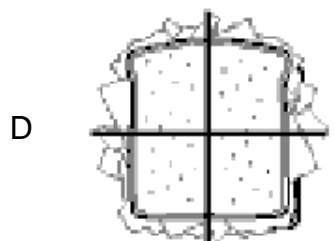
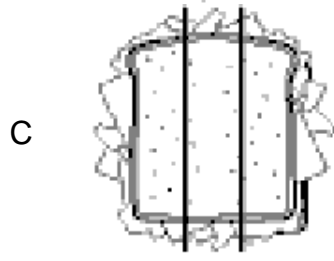
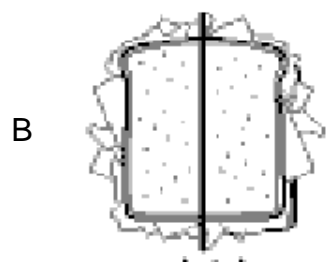
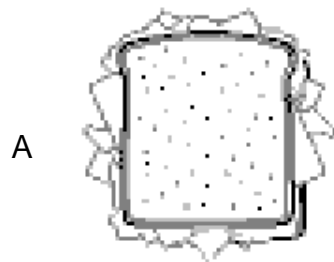
- 11 Clare walks her dog at 5:00.  
Which clock shows 5 o'clock?



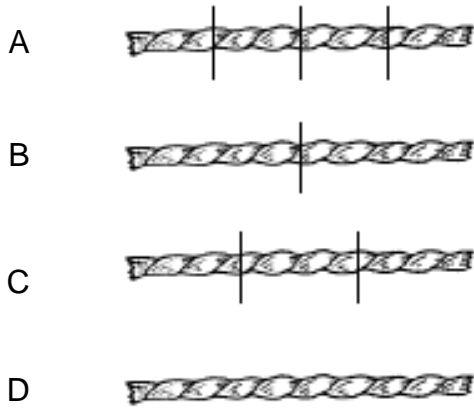
12 Which is divided in half?



13 Which sandwich shows three thirds?



14 How would you cut the yarn so 2 people would each get the same amount to use in a craft?



15 It is time for Peggy to call her friend.  
What time does the clock show?



- A 1:30
- B 2:30
- C 3:30
- D 4:30