

1 Which number should come next?

2, 4, 6, 8, ___

- A 8
- B 9
- C 10
- D 11

2 Put the numbers in order from least to greatest.

104, 103, 105, 102

- A 102, 103, 104, 105
- B 105, 103, 102, 104
- C 105, 104, 103, 102
- D 103, 104, 105, 102

3 Which number comes next?

5, 10, 15, ___

- A 20
- B 19
- C 16
- D 14

4 Which symbol is missing?

$$2 _ 2 = 4$$

- A =
- B -
- C +
- D ÷

5 Which does NOT add to 10?

- A $2 + 8$
- B $7 + 3$
- C $4 + 6$
- D $9 + 2$

6 What number is missing?

$$4 + _ = 10$$

- A 4
- B 6
- C 7
- D 9

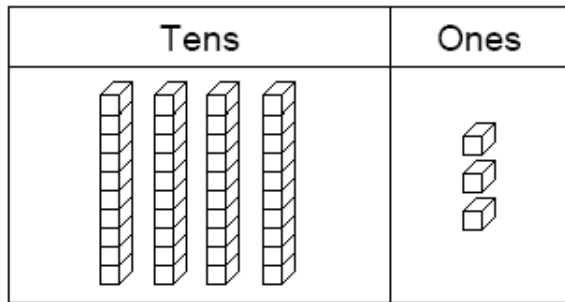
7 Which number shows one hundred forty-seven?

- A 104
- B 107
- C 147
- D 174

8 Which is correct?

- A $42 < 38$
- B $24 > 17$
- C $16 < 15$
- D $51 > 77$

9 Count the tens and ones.
What is the correct number?




- A 33
- B 43
- C 47
- D 53

10 Ellen had 23 balloons.
How much is 10 more?



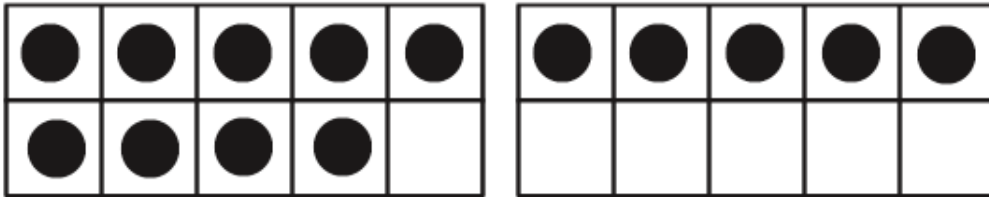
- A 43 balloons
- B 38 balloons
- C 33 balloons
- D 23 balloons

11 Tucker likes bones. How many bones does he have?



- A 1
- B 2
- C 3
- D 4

12 Which number sentence helps you add $9 + 5$?



- A $10 + 1 = 11$
- B $10 + 2 = 12$
- C $10 + 3 = 13$
- D $10 + 4 = 14$

13 Solve.

$$54 + 20 = ?$$

- A 74
- B 94
- C 84
- D 64

14 Solve.

$$70 - 20 = \underline{\quad} ?$$

- A 50
- B 60
- C 55
- D 90

15 Bianca has 13 pennies.
Daniel has 5 more than Bianca.
How many pennies does Daniel have?

- A 15
- B 16
- C 17
- D 18