
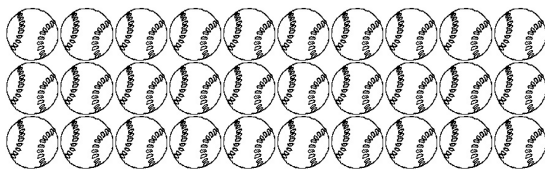


1 How many apples are shown?



- A 30
- B 37
- C 39
- D 40

2 How many baseballs are shown?



- A 29
- B 30
- C 31
- D 32

3 What number comes between 328 and 330?

328, \_\_\_\_\_, 330

- A 429
- B 329
- C 327
- D 229

4 What is the missing number on the counting strip?

21	?	23	24	25	26	27	28	29	30
----	---	----	----	----	----	----	----	----	----

- A 31
- B 22
- C 20
- D 19

5 What is the related addition fact?



$$6 + 1 = 7$$



$$\underline{\quad} + \underline{\quad} = \underline{\quad}$$

- A  $5 + 1 = 6$
- B  $6 + 6 = 12$
- C  $1 + 6 = 7$
- D  $1 + 5 = 6$

6 What is 5 less than 19?

- A 14
- B 11
- C 9
- D 4

7  $25 - 20 = ?$

- A 5
- B 20
- C 40
- D 45

8  $30 - 12 = ?$

- A 11
- B 18
- C 19
- D 42

9 Laura has 12 marbles. Roger has 33 marbles. How many marbles do they have together?



- A 11
- B 25
- C 35
- D 45

- 10 There were 8 boys and 7 girls at Neal's birthday party. At 4:00 P.M., there were 12 friends still there. How many had gone home?



- A 1 friend
  - B 2 friends
  - C 3 friends
  - D 4 friends
- 11 Jason's team has 5 baseball bats.  
Maria's team has double that number.  
How many bats does Maria's team have?
- A 0
  - B 5
  - C 8
  - D 10
- 12 Frank has 7 pennies. Kira has double that number. How many pennies does Kira have?



- A 10
- B 12
- C 13
- D 14

13  $9 + 2 = ?$

- A 9
- B 10
- C 11
- D 12

14 What is 8 plus 2?

- A 9
- B 10
- C 11
- D 12

15 What is the missing number?

$\underline{\quad} + 7 = 10$

- A 1
- B 2
- C 3
- D 4

16 What is the missing number?

$6 + \underline{\quad} = 10$

- A 2
- B 4
- C 6
- D 8

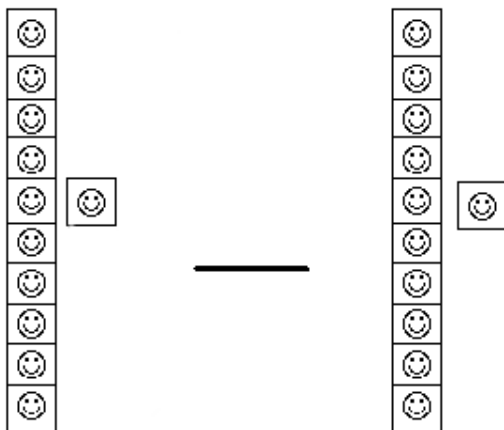
17  $9 + 9 = ?$

- A 10
- B 12
- C 16
- D 18

18  $6 + 6 = ?$

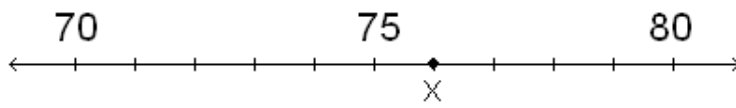
- A 12
- B 15
- C 16
- D 18

19 Which symbol belongs between the sets of cubes?



- A =
- B >
- C <
- D :) )

20 What is the closest ten to 76?



- A 76
- B 80
- C 83
- D 90

21 The fruit bowl has 3 apples, 2 bananas, and 4 oranges. How many pieces of fruit are there in all?

$$3 + 2 + 4 =$$

- A 8 pieces of fruit
- B 9 pieces of fruit
- C 10 pieces of fruit
- D 11 pieces of fruit

22 Which symbol is missing?

$$26 \_ 19 = 7$$


- A =
- B X
- C +
- D -

23 Which symbol is missing?

$$22 \text{ \_\_\_ } 11 = 33$$

- A +
- B -
- C =
- D >

24 Which symbol is missing?



$$\text{ \_\_\_\_\_\_ } \begin{array}{|c|} \hline \star \\ \hline \star \\ \hline \star \\ \hline \star \\ \hline \star \\ \hline \end{array} = 45 \text{ stars}$$

- A -
- B =
- C <
- D +



25 What time is shown on the clock?



- A 9:00
- B 8:00
- C 12:00
- D 12:40

26 What time is shown on the clock?



- A 1:00
- B 2:00
- C 11:00
- D 12:00

27  $29 - 17 = ?$

- A 11
- B 12
- C 14
- D 21